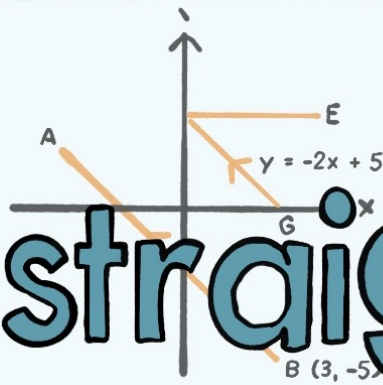
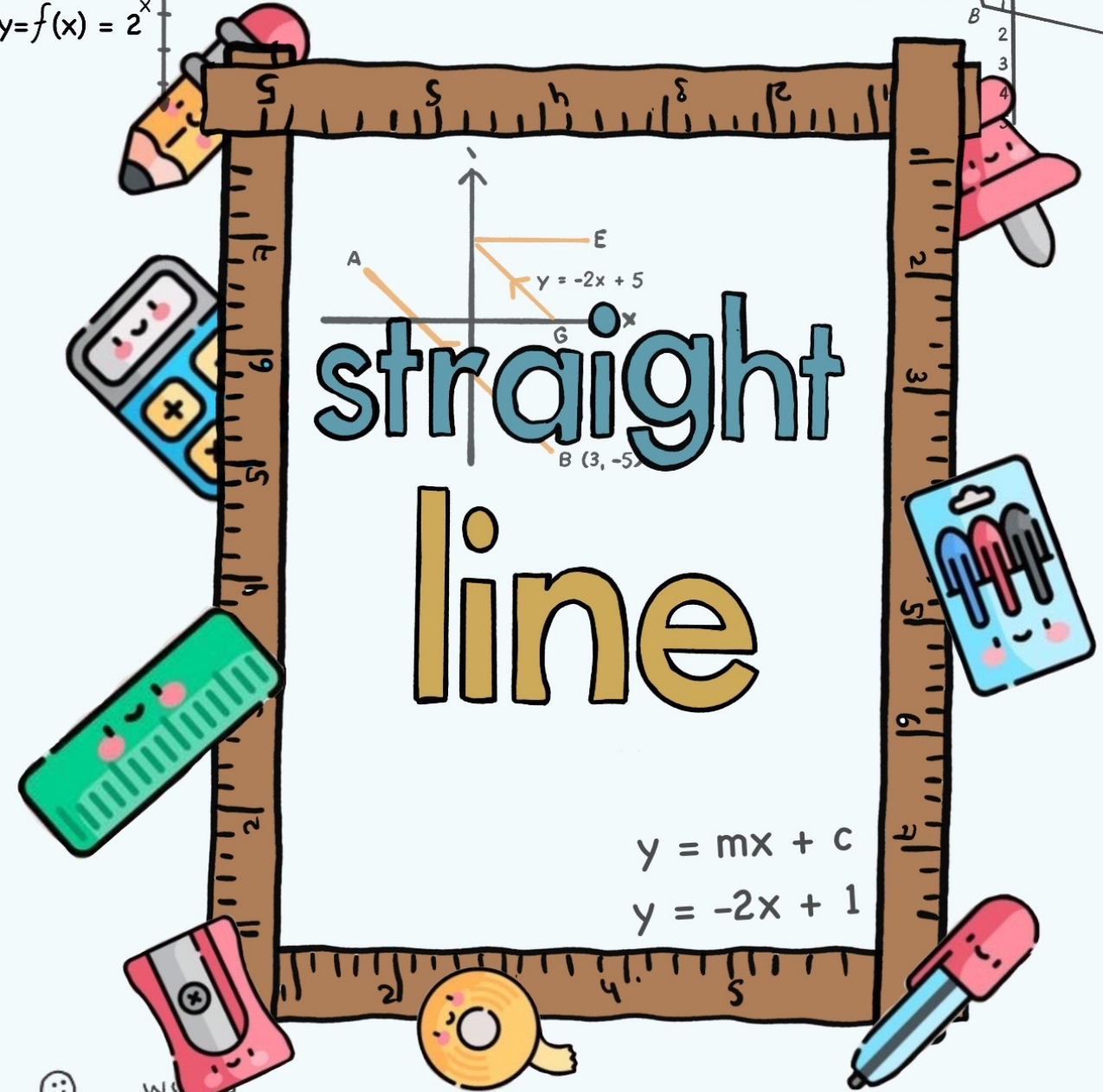


straight line



$$y = mx + c$$

$$y = -2x + 1$$



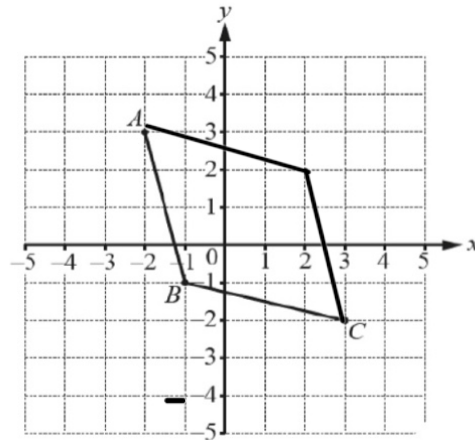
$$F(x) =$$



$$F'(x) =$$



Question 1



The diagram shows two sides of a rhombus $ABCD$.

(a) Write down the co-ordinates of A .

[1]

$$(-2, 3)$$

(b) Complete the rhombus $ABCD$ on the grid.

[1]

Question 2

$$y = mx + c$$

Find the value of y when $m = -2$, $x = -7$ and $c = -3$.

[2]

$$\begin{aligned} y &= (-2)(-7) - 3 \\ &= +14 - 3 \\ &= 11 \end{aligned}$$

Question 3

The point A has co-ordinates $(-4, 6)$ and the point B has co-ordinates $(7, -2)$.

[3]

Calculate the length of the line AB .

$$\begin{aligned} \text{length} &= \sqrt{(-2 - 6)^2 + (7 + 4)^2} \\ &= \sqrt{185} = 13.6 \end{aligned}$$

Question 4

Find the equation of the line passing through the points with co-ordinates $(5, 9)$ and $(-3, 13)$.

[3]

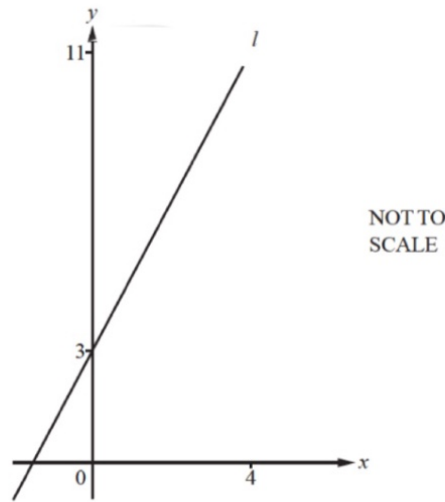
$$m = \frac{13 - 9}{-3 - 5} = -\frac{1}{2}$$

$$y - 13 = -\frac{1}{2}(x + 3)$$

The Maths Society

$$y = -\frac{1}{2}x + \frac{23}{2}$$

Question 5



The diagram shows the straight line, l , which passes through the points $(0, 3)$ and $(4, 11)$.

(a) Find the equation of line l in the form $y = mx + c$.

$$m = \frac{y_2 - y_1}{x_2 - x_1} = \frac{11 - 3}{4 - 0} = 2$$

$$\begin{cases} y - 3 = (2x) \\ y = 2x + 3 \end{cases}$$

[3]

(b) Line p is perpendicular to line l .

Write down the gradient of line p .

[1]

$$m \times m_{\perp} = -1$$

$$m_{\perp} = -\frac{1}{2}$$

Question 6

$A(5, 23)$ and $B(-2, 2)$ are two points.

(a) Find the co-ordinates of the midpoint of the line AB .

[2]

$$\text{midpoint} = \left(\frac{5 + (-2)}{2}, \frac{23 + 2}{2} \right)$$

$$= \left(\frac{3}{2}, \frac{25}{2} \right)$$

(b) Find the equation of the line AB .

[3]

$$m = \frac{y_2 - y_1}{x_2 - x_1} = \frac{2 - 23}{-2 - 5} = \frac{-21}{-7} = 3$$

$$\begin{cases} y - 2 = 3(x + 2) \\ y = 3x + 6 + 2 \\ y = 3x + 8 \end{cases}$$

(c) Show that the point $(3, 17)$ lies on the line AB .

[1]

$$y = 3(3) + 8$$

$$= 17 \quad \therefore (3, 17) \text{ lies on } AB.$$

Question 7

Find the equation of the line passing through the points $(0, -1)$ and $(3, 5)$.

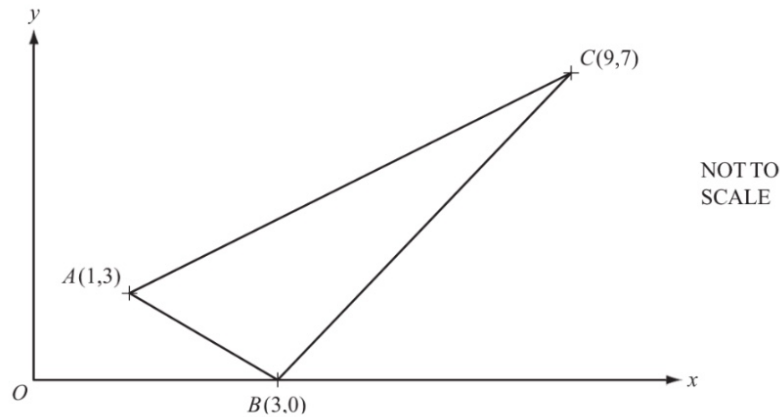
[3]

$$m = \frac{5 + 1}{3 - 0} = 2$$

$$\begin{cases} y + 1 = 2x \\ y = 2x - 1 \end{cases}$$

The Maths Society

Question 1



The co-ordinates of A , B and C are shown on the diagram, which is not to scale.

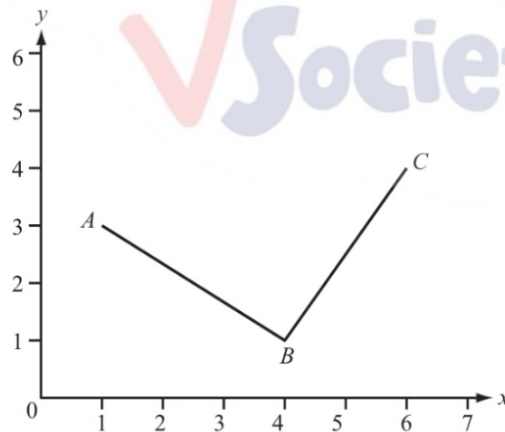
(a) Find the length of the line AB .

$$\begin{aligned} \text{length}_{AB} &= \sqrt{(0-3)^2 + (3-1)^2} \\ &= \sqrt{13} = 3.61 \end{aligned} \quad [3]$$

(b) Find the equation of the line AC .

$$\begin{aligned} m &= \frac{7-3}{9-1} = \frac{4}{8} = \frac{1}{2} & y-3 &= \frac{1}{2}(x-1) \\ & & y &= \frac{1}{2}x - \frac{1}{2} + 3 \\ & & y &= \frac{1}{2}x + \frac{5}{2} \end{aligned} \quad [3]$$

Question 2



$A(1, 3)$, $B(4, 1)$ and $C(6, 4)$ are shown on the diagram.

(b) Work out the equation of the line BC .

$$\begin{aligned} m &= \frac{4-1}{6-4} = \frac{3}{2} & y-1 &= \frac{3}{2}(x-4) \\ & & &= \frac{3}{2}x - 5 \end{aligned} \quad [3]$$

(c) ABC forms a right-angled isosceles triangle of area 6.5 cm^2 .

Calculate the length of AB .

$$\text{length}_{AB} = \sqrt{(1-3)^2 + (4-1)^2} = \sqrt{13} = 3.61$$

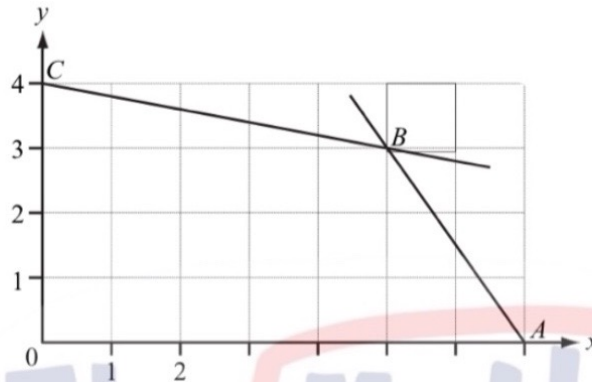
Question 3

Find the length of the straight line from $Q(-8, 1)$ to $R(4, 6)$.

[3]

$$\begin{aligned} \text{length} &= \sqrt{(6-1)^2 + (4+8)^2} \\ &= 13 \end{aligned}$$

Question 4



$$\begin{aligned} A &= (7, 0) \\ B &= (5, 3) \\ C &= (0, 4) \end{aligned}$$

The lines AB and CB intersect at B .

(a) Find the co-ordinates of the midpoint of AB .

$$\text{midpoint}_{AB} = \left(\frac{7+0}{2}, \frac{0+4}{2} \right) \quad [1]$$

(b) Find the equation of the line CB .

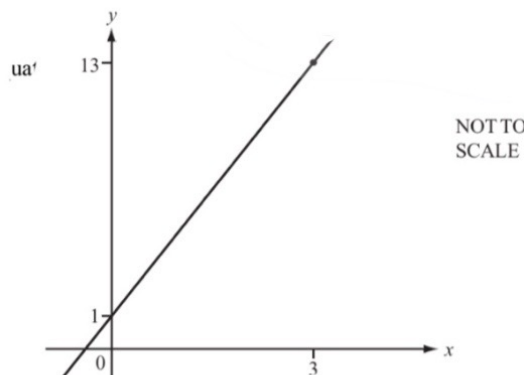
$$= (6, 1.5) \quad [3]$$

$$\begin{aligned} m &= \frac{4-3}{0-5} \\ &= -\frac{1}{5} \end{aligned}$$

$$y - 4 = -\frac{1}{5}x$$

$$y = -\frac{1}{5}x + 4$$

Question 5



The diagram shows the straight line which passes through the points $(0, 1)$ and $(3, 13)$.

Find the equation of the straight line.

[3]

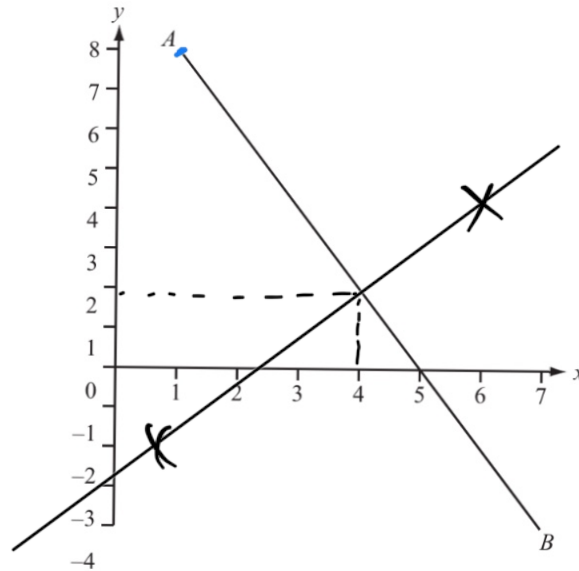
$$m = \frac{13-1}{3} = \frac{12}{3} = 4$$

$$y - 1 = 4x$$

$$y = 4x + 1$$

The Maths Society

Question 6



(a) Using a straight edge and compasses only, construct the perpendicular bisector of AB on the diagram above. [2]

(b) Write down the co-ordinates of the midpoint of the line segment joining $A(1, 8)$ to $B(7, -4)$. [1]

$$(4, 2)$$

(c) Find the equation of the line AB . [3]

$$\begin{aligned} & \sqrt{(-4-8)^2 + (7-1)^2} \\ & = 6\sqrt{5} = 13.42 \end{aligned}$$

Question 7

(a) The line $y = 2x + 7$ meets the y -axis at A .

Write down the co-ordinates of A . $4x = 0$

$$y = 7 \quad (0, 7)$$

(b) A line parallel to $y = 2x + 7$ passes through $B(0, 3)$. |

(i) Find the equation of this line.

$$m_{//} = 2$$

$$y - 3 = 2x, \quad y = 2x + 3$$

(ii) C is the point on the line $y = 2x + 1$ where $x = 2$.

Find the co-ordinates of the midpoint of BC .

$$y = 4 + 1 = 5 \quad (2, 5)$$

$$\text{midpoint} = \left(\frac{2}{2}, \frac{3+5}{2} \right) = (1, 4)$$

Question 8

Find the equation of the straight line which passes through the points (0, 8) and (3, 2).

$$m = \frac{2-8}{3-0} = \frac{-6}{3} = -2 \qquad y-8 = -2x \qquad [3]$$
$$y = -2x + 8$$

Question 1

The points (2, 5), (3, 3) and (k, 1) all lie in a straight line.

- (a) Find the value of k . [1]

$$k = 4$$

- (b) Find the equation of the line. [3]

$$m = \frac{3-5}{3-2} = -2 \qquad y-3 = -2(x-3)$$
$$y = -2x + 9$$

Question 2



- (a) The line $y = 4$ meets the line $2x + y = 8$ at the point A . [1]
Find the co-ordinates of A .

$$2x + 4 = 8 \qquad (2, 4)$$
$$x = 2$$

- (b) The line $3x + y = 18$ meets the x axis at the point B . [1]
Find the co-ordinates of B .

$$3x = 18 \qquad (6, 0)$$
$$x = 6$$

- (c) (i) Find the co-ordinates of the mid-point M of the line joining A to B . [1]

$$\left(\frac{2+6}{2}, \frac{4}{2} \right) = (4, 2)$$

- (ii) Find the equation of the line through M parallel to $3x + y = 18$. [2]

$$y-2 = -3(x-4)$$
$$y = -3x + 14$$

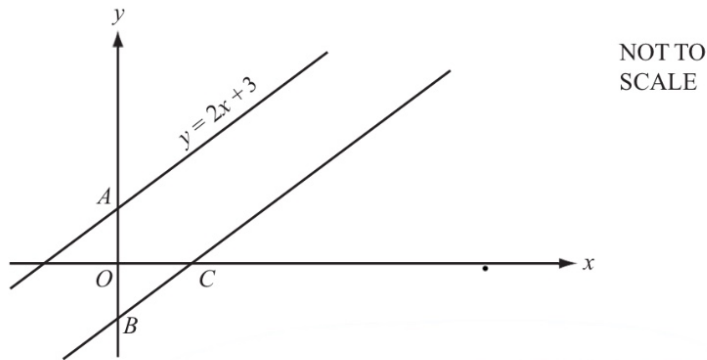
Question 3

Find the length of the line joining the points $A(-4, 8)$ and $B(-1, 4)$.

[2]

$$\begin{aligned} \text{length} &= \sqrt{(4-8)^2 + (-1+4)^2} \\ &= 5 \end{aligned}$$

Question 4



The distance AB is 7 units.

- (a) Write down the equation of the line through B which is parallel to $y = 2x + 3$.

[2]

$$\begin{aligned} B &= 3 - 7 = -4 \\ &(0, -4) \end{aligned}$$

$$y = 2x - 4$$

- (b) Find the co-ordinates of the point C where this line crosses the x axis.

[1]

$$0 = 2x - 4$$

$$\frac{4}{2} = x$$

$$x = 2 \quad (2, 0)$$

Question 5

The equation of a straight line can be written in the form $3x + 2y - 8 = 0$.

- (a) Rearrange this equation to make y the subject.

[2]

$$2y = -3x + 8$$

$$y = \frac{-3x + 8}{2}$$

- (b) Write down the gradient of the line.

[1]

$$-\frac{3}{2}$$

- (c) Write down the co-ordinates of the point where the line crosses the y axis.

[1]

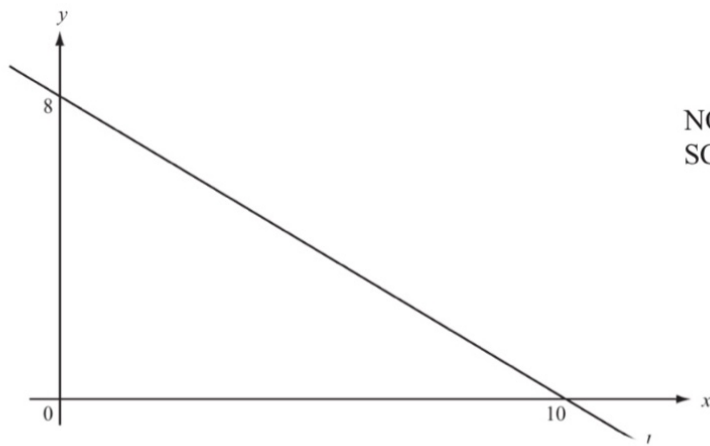
$$-3x + 8 = 0$$

$$-3x = -8$$

$$x = \frac{8}{3}$$

$$\left(\frac{8}{3}, 0\right)$$

Question 6



NOT TO SCALE

The line l passes through the points $(10, 0)$ and $(0, 8)$ as shown in the diagram.

- (a) Find the gradient of the line as a fraction in its simplest form. [1]

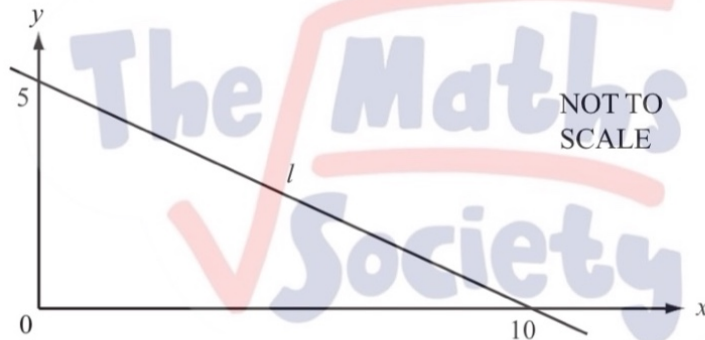
$$m = -\frac{8}{10} = -\frac{4}{5}$$

- (b) Write down the equation of the line parallel to l which passes through the origin. [1]

$$y = -\frac{4}{5}x$$

- (c) Find the equation of the line parallel to l which passes through the point $(3, 1)$. [2]

Question 7



NOT TO SCALE

- (a) Calculate the gradient of the line l . [2]

$$m = \frac{5}{-10} = -\frac{1}{2}$$

- (b) Write down the equation of the line l . [2]

$$y - 5 = -\frac{1}{2}x$$

$$y = -\frac{1}{2}x + 5$$

Question 8

The straight line graph of $y = 3x - 6$ cuts the x -axis at A and the y -axis at B .

- (a) Find the coordinates of A and the coordinates of B . [2]

$$\begin{aligned} 3x - 6 &= 0 & y &= 3(0) - 6 = -6 \\ x &= 2 & & B(0, -6) \\ A(2, 0) & & & \end{aligned}$$

- (b) Calculate the length of AB . [2]

$$\text{length} = \sqrt{(-6)^2 + (2)^2} = 6.32$$

- (c) M is the mid-point of AB .
Find the coordinates of M . [1]

$$\text{midpoint} = \left(\frac{2}{2}, \frac{-6}{2} \right) = (1, -3)$$

The Maths Society

Question 1

A line has gradient 5.
 M and N are two points on this line.
 M is the point $(x, 8)$ and N is the point $(k, 23)$.

Find an expression for x in terms of k .

$$m = 5$$



$$\frac{23-x}{k-8} = 5$$

$$23-x = 5k-40$$

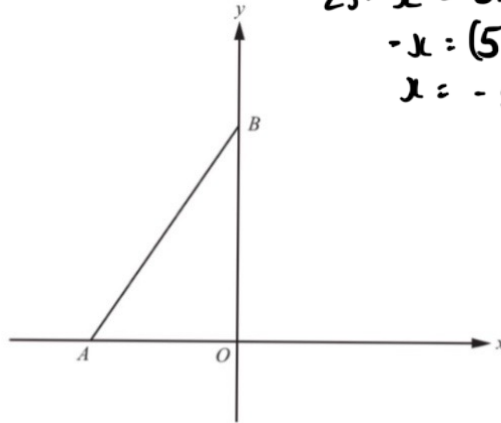
$$-x = (5k-40-23)$$

$$x = -5k + 63$$

NOT TO SCALE

[3]

Question 2



A is the point $(-2, 0)$ and B is the point $(0, 4)$.

(a) Find the equation of the straight line joining A and B .

$$m = \frac{4}{4} = 1$$

$$y - 0 = 1(x + 2)$$

$$y = x + 2$$

[3]

(b) Find the equation of the perpendicular bisector of AB .

$$m_{\perp} = -\frac{1}{1} = -1$$

$$\text{mid} = \left(\frac{-2+0}{2}, \frac{0+4}{2} \right) = (-1, 2)$$

$$y - 2 = -1(x + 1)$$

$$y = -\frac{1}{1}x + \frac{3}{1}$$

[4]

Question 3

A is the point $(8, 3)$ and B is the point $(12, 1)$.

Find the equation of the line, perpendicular to the line AB , which passes through the point $(0, 0)$.

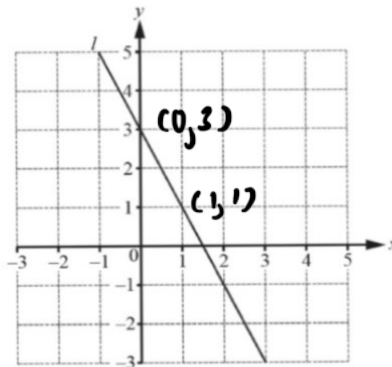
$$m = \left(\frac{1-3}{12-8} \right) = \frac{-2}{4} = -\frac{1}{2}$$

$$m_{\perp} = 2$$

$$y = 2x$$

[3]

Question 4



(a) Find the equation of the line l .

Give your answer in the form $y = mx + c$.

$$m = \frac{1-3}{1-0} = -2$$

$$y - 3 = -2x, \quad y = -2x + 3$$

[3]

(b) A line perpendicular to the line l passes through the point $(3, -1)$.

Find the equation of this line.

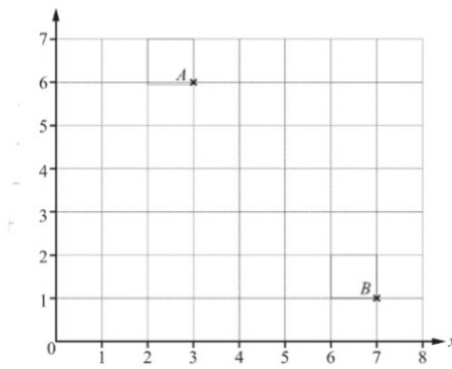
$$m = \frac{1}{2}$$

$$y + 1 = \frac{1}{2}x - \left(\frac{3}{2} \right) \frac{1}{2}$$

$$y = \frac{1}{2}x - \frac{5}{2}$$

[3]

Question 5



Point A has co-ordinates $(3, 6)$.

[1]

(a) Write down the co-ordinates of point B .

$$(7, 1)$$

[2]

(b) Find the gradient of the line AB .

$$m = \frac{1-6}{7-3} = \frac{-5}{4}$$

(c) Find the equation of the line that

[3]

- is perpendicular to the line AB
- and
- passes through the point $(0, 2)$.

$$m_{\perp} = \frac{4}{5}$$

$$y - 2 = \frac{4}{5}x$$

$$y = \frac{4}{5}x + 2$$

Question 1

A is the point $(4, 1)$ and B is the point $(10, 15)$.

[6]

Find the equation of the perpendicular bisector of the line AB .

$$\text{mid} = \left(\frac{4+10}{2}, \frac{1+15}{2} \right) = (7, 8)$$

$$m = \frac{15-1}{10-4} = \frac{14}{6} = \frac{7}{3}$$

$$m_{\perp} = -\frac{3}{7}$$

$$y - 8 = -\frac{3}{7}(x - 7)$$

$$y = -\frac{3}{7}x + 3 + 8$$

$$y = -\frac{3}{7}x + 11$$

Question 2

Find the equation of the line that

- is perpendicular to the line $y = 3x - 1$
- and
- passes through the point $(7, 4)$.

$$m_{\perp} = -\frac{1}{3}$$

$$y - 4 = -\frac{1}{3}(x - 7)$$

$$y = -\frac{1}{3}x + \frac{19}{3}$$

[3]

Question 3

Find the co-ordinates of the mid-point of the line joining the points $A(2, -5)$ and $B(6, 9)$.

[2]

$$\begin{aligned} \text{mid}_{AB} &= \left(\frac{2+6}{2}, \frac{-5+9}{2} \right) \\ &= (4, 2) \end{aligned}$$

Question 4

A straight line passes through two points with co-ordinates (6, 8) and (0, 5).
Work out the equation of the line.

[3]

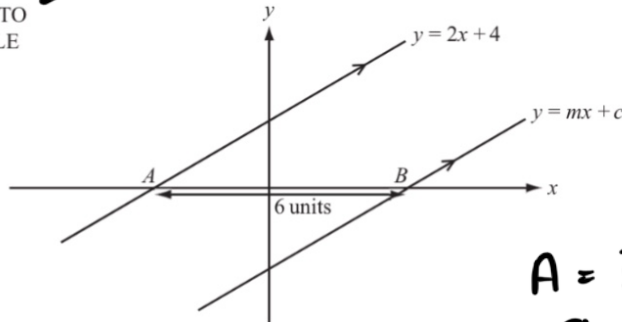
$$m = \frac{5-8}{0-6} = \frac{-3}{-6} = \frac{1}{2}$$

$$y - 5 = \frac{1}{2}x$$

$$y = \frac{1}{2}x + 5$$

Question 5

NOT TO SCALE



$$A = ?$$

$$0 = 2x + 4$$

$$x = -2$$

The line $y = mx + c$ is parallel to the line $y = 2x + 4$.
The distance AB is 6 units.

Find the value of m and the value of c .

$$m = 2$$

$$\hookrightarrow B = -2 + 6 \quad [4]$$

$$= 4$$

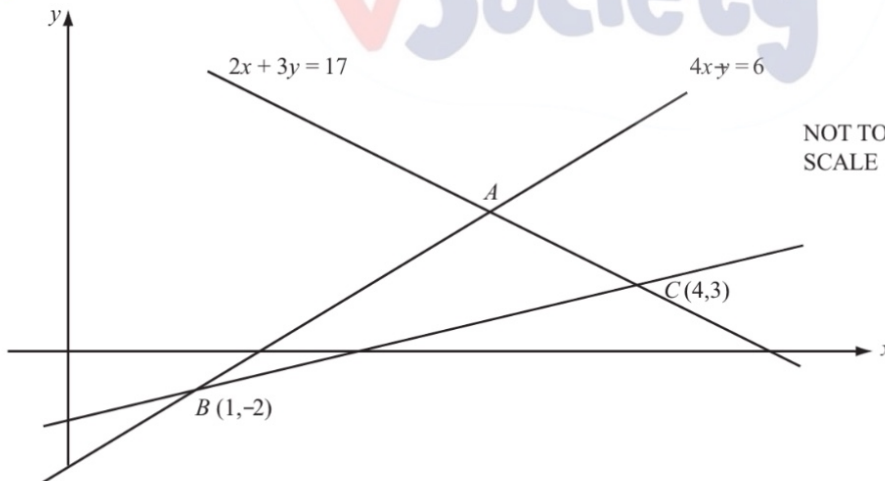
$$(4, 0)$$

$$y = 2(x - 4)$$

$$y = 2x - 8$$

$$c = -8$$

Question 6



In the diagram, the line AC has equation $2x + 3y = 17$ and the line AB has equation $4x - y = 6$.
The lines BC and AB intersect at $B(1, -2)$.
The lines AC and BC intersect at $C(4, 3)$.

(a) Use algebra to find the coordinates of the point A .

$$4x - 6 = \frac{17 - 2x}{3}$$

$$12x - 18 = 17 - 2x$$

$$14x = 35$$

$$x = 2.5$$

$$-y = 6 - 4x$$

$$y = 4x - 6 \quad [3]$$

$$y = 4\left(\frac{5}{2}\right) - 6$$

$$= 4 \quad [3]$$

$$\left(\frac{5}{2}, 4\right)$$

(b) Find the equation of the line BC .

$$m = \frac{3+2}{4-1} = \frac{5}{3}$$

$$y + 2 = \frac{5}{3}x - \frac{5}{3}$$

$$y = \frac{5}{3}x - \frac{11}{3}$$

Question 7

The points $A(6,2)$ and $B(8,5)$ lie on a straight line.

- (a) Work out the gradient of this line. [1]

$$m = \frac{5-2}{8-6} = \frac{3}{2}$$

- (b) Work out the equation of the line, giving your answer in the form $y = mx + c$. [2]

$$y - 2 = \frac{3}{2}(x - 6)$$

$$y = \frac{3}{2}x - 9 + 2$$

$$y = \frac{3}{2}x - 7$$

Question 1

A line joins the points $A(-3, 8)$ and $B(2, -2)$.

- (a) Find the co-ordinates of the midpoint of AB . [2]

$$\left(\frac{-3+2}{2}, \frac{8-2}{2} \right) = \left(\frac{1}{2}, 3 \right)$$

- (b) Find the equation of the line through A and B . [3]

Give your answer in the form $y = mx + c$.

$$m = \frac{-2-8}{2+3} = \frac{-10}{5} = -2$$

$$y - 8 = -2(x + 3)$$

$$y = -2x - 6 + 8$$

$$y = -2x + 2$$

- (c) Another line is parallel to AB and passes through the point $(0, 7)$.

Write down the equation of this line. [2]

$$m = -2$$

$$y - 7 = -2x$$

$$y = -2x + 7$$

- (d) Find the equation of the line perpendicular to AB which passes through the point $(1, 5)$. [4]

Give your answer in the form $ax + by + c = 0$ where a , b and c are integers.

$$m_{\perp} = \frac{1}{2}$$

$$y - 5 = \frac{1}{2}(x - 1)$$

$$y = \frac{1}{2}x - \frac{1}{2} + 5$$

$$y = \frac{1}{2}x + \frac{9}{2}$$

$$-\frac{1}{2}x + y - \frac{9}{2} = 0 \rightarrow \frac{1}{2}x - y + \frac{9}{2} = 0$$

$$x - 2y + 9 = 0$$

Question 2

A line joins the points $A(-2, -5)$ and $B(4, 13)$.

- (a) Calculate the length AB . [3]

$$\sqrt{(13+5)^2 + (4+2)^2} = 6\sqrt{10} = 18.97 \approx 19 \text{ unit}$$

- (b) Find the equation of the line through A and B .

Give your answer in the form $y = mx + c$.

$$m = \frac{13+5}{4+2} = \frac{18}{6} = 3$$

$$y + 5 = 3(x + 2) \\ = 3x + 6 - 5 \\ = 3x + 1$$

- (c) Another line is parallel to AB and passes through the point $(0, -5)$. [2]

Write down the equation of this line.

$$y + 5 = 3(x) \quad y = 3x - 5$$

- (d) Find the equation of the perpendicular bisector of AB . [5]

$$m_{\perp} = -\frac{1}{3}, \quad \text{mid} = \left(\frac{-2+4}{2}, \frac{13-5}{2} \right) = (1, 4)$$

$$y - 4 = -\frac{1}{3}x + \frac{1}{3}$$

$$y = -\frac{1}{3}x + \frac{13}{3}$$

Question 3

A line AB joins the points $A(3, 4)$ and $B(5, 8)$.

- (a) Write down the co-ordinates of the midpoint of the line AB . [2]

$$\text{mid} = \left(\frac{3+5}{2}, \frac{4+8}{2} \right) = (4, 6)$$

- (b) Calculate the distance AB . [3]

$$\sqrt{(8-4)^2 + (5-3)^2} = 2\sqrt{5} \text{ unit}$$

- (c) Find the equation of the line AB . [3]

$$m = \frac{8-4}{5-3} = \frac{4}{2} = 2$$

$$y - 8 = 2(x - 5) \\ y = 2x - 2$$

- (d) A line perpendicular to AB passes through the origin and through the point $(6, r)$.

Find the value of r .

$$m_{\perp} = -\frac{1}{2} \quad (0, 0)$$

$$y = -\frac{1}{2}x$$

$$y = -\frac{1}{2}(6) = -3$$

Question 4

- (a) A straight line joins the points $(-1, -4)$ and $(3, 8)$.

- (i) Find the midpoint of this line. [2]

$$\text{mid} \Rightarrow \left(\frac{-1+3}{2}, \frac{-4+8}{2} \right) = (1, 2)$$

- (ii) Find the equation of this line.

Give your answer in the form $y = mx + c$. [3]

$$m = \frac{8+4}{3+1} = \frac{12}{4} = 3 \quad \left| \begin{array}{l} y+4 = 3(x+1) \\ y = 3x-1 \end{array} \right.$$